



# Logical Reasoning and Quantitative Aptitude

Theme	Logical Reasoning and Quantitative Aptitude
Question 1	<p>Madeline bought 4 pens and 3 notebooks. Each pen costs ₹ 40. She spent ₹ 20 less buying the pens than buying the notebooks. What was the cost of each notebook?</p> <ul style="list-style-type: none"><li>• ₹ 45</li><li>• ₹ 50</li><li>• ₹ 55</li><li>• ₹ 60</li></ul>
Question 2	<p>In Mr Ray's class today, each student either did reading or writing. There were groups of 3 for reading. There were groups of 5 for writing. There were 7 groups altogether. How many students could be in the class?</p> <ul style="list-style-type: none"><li>• 21</li><li>• 24</li><li>• 26</li><li>• 29</li></ul>

<p>Question 3</p>	<p>If three-fourths of a cake weighs 450 g, what will be the weight of the full cake?</p> <ul style="list-style-type: none"><li>• 900 g</li><li>• 600 g</li><li>• 500 g</li><li>• 800 g</li></ul> 
<p>Question 4</p>	<p>One-third of a number is one less than 7. What is the number?</p> <ul style="list-style-type: none"><li>• 2</li><li>• 18</li><li>• 21</li><li>• 24</li></ul>
<p>Question 5</p>	<p>Rahul's age is twice his brother's age now. How old will be Rahul when his brother turns 11 years, if the current age of his brother is 5 years?</p> <ul style="list-style-type: none"><li>• 10 years</li><li>• 15 years</li><li>• 16 years</li><li>• 22 years</li></ul>

<p>Question 6</p>	<p>Rani's scoop can hold 60 grams of flour. She fills a jar with 6 full scoops of flour. How much more flour does the jar hold now than a full scoop of flour?</p> <ul style="list-style-type: none"> <li>• 54 grams</li> <li>• 75 grams</li> <li>• 300 grams</li> <li>• 360 grams</li> </ul> 
<p>Question 7</p>	<p>Ten men can finish a piece of work in 10 days. In how many days can five men finish the same piece of work?</p> <ul style="list-style-type: none"> <li>• 5 days</li> <li>• 15 days</li> <li>• 20 days</li> <li>• 25 days</li> </ul>
<p>Question 8</p>	<p>Rony read this sign as he reached the train station. For how many hours is track work being carried out this weekend?</p> <ul style="list-style-type: none"> <li>• 16 hours</li> <li>• 28 hours</li> <li>• 34 hours</li> <li>• 40 hours</li> </ul> <div style="border: 2px solid red; border-radius: 15px; padding: 10px; text-align: center; margin: 10px auto; width: fit-content;"> <p><b>TRACK WORK</b>  <b>this weekend:</b>  <b>4 am SATURDAY</b>  <b>UNTIL</b>  <b>8 pm SUNDAY</b></p> </div>

Question 9

Andrew loves music. He is saving money to buy a new guitar. In the first month, he saved ₹ 720. Every month after the first, he saved ₹ 120 more than the month before. How much money did Andrew save in total in 5 months?


- ₹ 4,080
- ₹ 4,260
- ₹ 4,530
- ₹ 4,800



Question 10

In a zoo, one-quarter of the animals are mammals and the rest are either birds or reptiles. There are 55 mammals in the wildlife park. How many birds and reptiles are there?

- 55
- 110
- 165
- 220



- x -

## Answers

Answer 1	₹ 60
Answer 2	29
Answer 3	600 g
Answer 4	18
Answer 5	16 years
Answer 6	300 grams
Answer 7	20 days
Answer 8	40 hours
Answer 9	₹ 4,800
Answer 10	165